



# B.K. BIRLA CENTRE FOR EDUCATION

SARALA BIRLA GROUP OF SCHOOLS  
A CBSE DAY-CUM-BOYS' RESIDENTIAL SCHOOL



## TERM-1 EXAMINATION(2025-26) INFORMATION TECHNOLOGY

Class: II

Date: 03-09-2025

Admission No. ....

Time : 2 hrs.

Max Marks: 40

Roll No. :.....

## ANSWER KEY

Q.(1) Match the parts of a computer to their tasks.

(4 x 1 = 4)

<u>Tasks</u>	<u>Computer Parts</u>
(a) Type	(i) Mouse
(b) Move	(ii) Monitor
(c) Display	(iii) CPU
(d) Processing	(iv) Keyboard

Q.(2) Tick the correct option. (Answer any 4)

(4 x 1 = 4)

(i) A standard keyboard has ..... keys.

(a) 103

(b) 104

(c) 105

(ii) Which part of a human body works like a CPU ?

(a) Ears

(b) Mouth

(c) Brain

(iii) There are ..... function keys on a keyboard.

(a) 10

(b) 12

(c) 15

(iv) Clicking means to press the left mouse button .....

(a) Once

(b) Twice

(c) Thrice

(v) ..... makes a computer run when electricity goes off.

(a) Windows

(b) UPS

(c) CPU

**(vi) Which tool is used to erase a part of drawing ?**

(a) Crop

(b) Delete

(c) **Eraser**

**Q.(3) Fill in the blanks with the help of words given in the box. (Answer any 4)**

**(4 x 1 = 4)**

<b>fast</b>	<b>spacebar</b>	<b>resize</b>	<b>MS-Paint</b>	<b>keys</b>	<b>input</b>
-------------	-----------------	---------------	-----------------	-------------	--------------

(a) Input.

(b) Fast

(c) Spacebar

(d) Keys

(e) Resize

(f) MS-Paint

**Q.(4) Write “T” for True and “F” for False statements. (Answer any 4)**

**(4 x 1 = 4)**

(a) True

(b) False

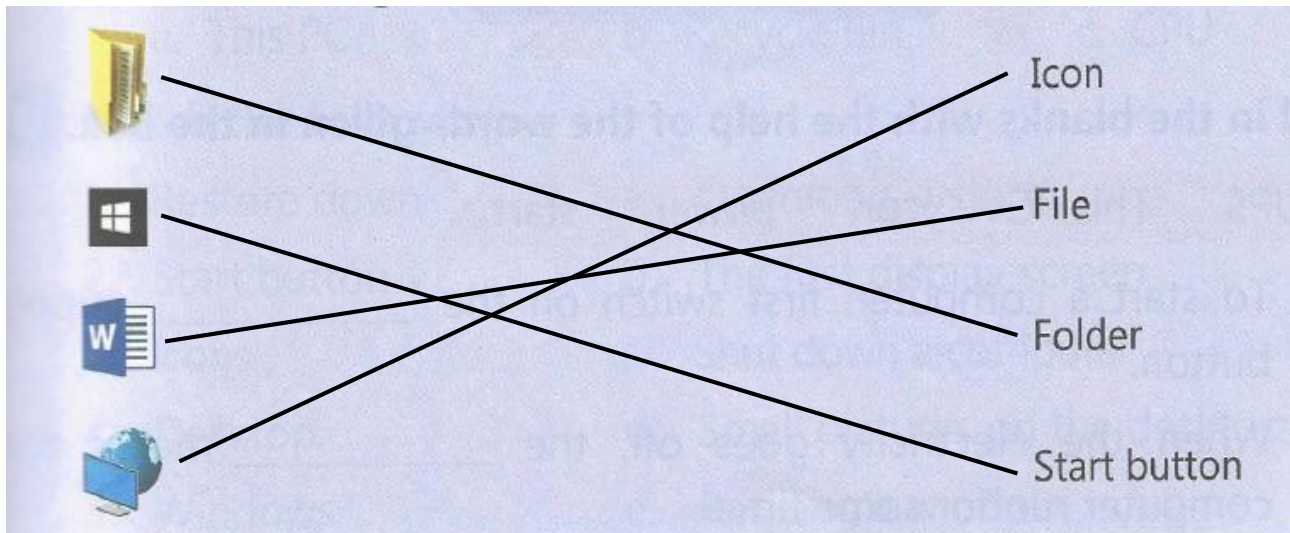
(c) False

(d) True

(e) True

**Q.(5) Match the following :**

**(4 x 1 = 4)**



**Q.(6) Answer the following questions : (Answer any 10)**

**(10 x 2 = 20)**

**(i)** Name the various types of computer.

Ans. :

- (i) Desktop Computer
- (ii) Laptop Computer
- (iii) Tablet

**(ii)** Write down any two places where you have seen the computer.

Ans. :

- (i) In Schools
- (ii) At Offices
- (iii) At Shops
- (iv) In Bank
- (v) At Hospitals
- (vi) At the Railway Station


**(iii)** What are the main parts of computer ?

Ans. :

- (i) Monitor
- (ii) Keyboard
- (iii) CPU

(iv) Mouse

(iv) Write 'I' for input devices and 'O' for output devices in the given boxes.



(v) Write any two main differences between a computer and calculator.

Ans. :

Computer	Calculator
It can work on numbers and alphabets	It can work on numbers
It can display more than one result	It can display only one result
It is programmable	It is not programmable
It has large memory	It has less memory

(vi) What is the difference between clicking and double clicking ?

Ans. :

**Clicking** : It means to press the left mouse button once.

**Double clicking** : It means to press the left mouse button twice.

(vii) Name the various types of mouse.

Ans. :

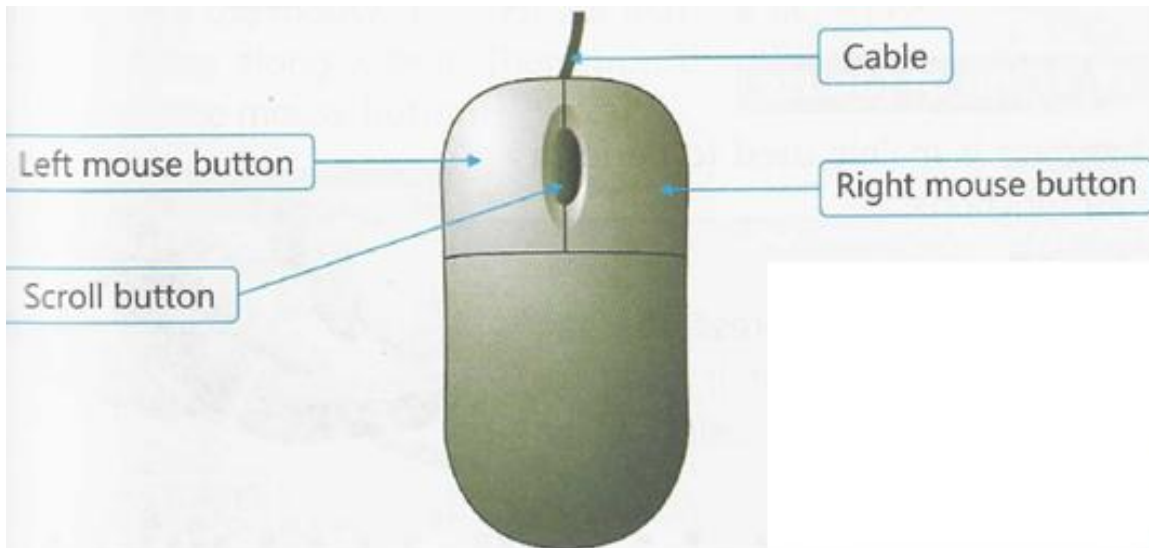
Track Ball Mouse

Optical Mouse

Wireless Optical Mouse

(viii) Draw a well-labelled diagram of a computer mouse.

Ans. :



**(ix)** Steps to start a computer

2	Switch on the UPS
4	Switch on the monitor
1	Switch on the main power supply.
3	Switch on the CPU

**(x)** What is the use of Recycle Bin ?

Ans. : It is used to store all the deleted files and folders.

**(xi)** What is the purpose of resizing a picture ?

Ans. :

We can increase or decrease the size of picture horizontally or vertically.

**(xii)** Draw following tools used in MS-Paint.

Ans. :

(a) Eraser Tool :



(b) Fill Tool



\*\*\*\*\* ALL THE BEST \*\*\*\*\*